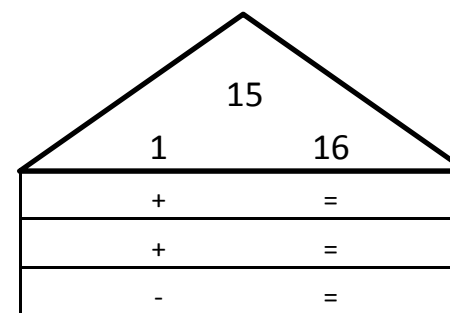
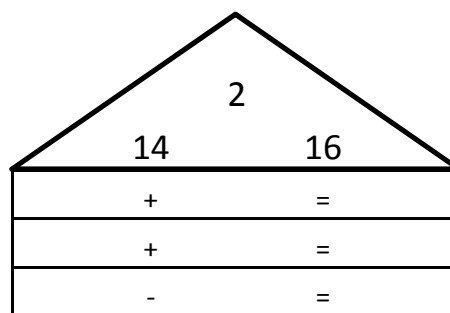
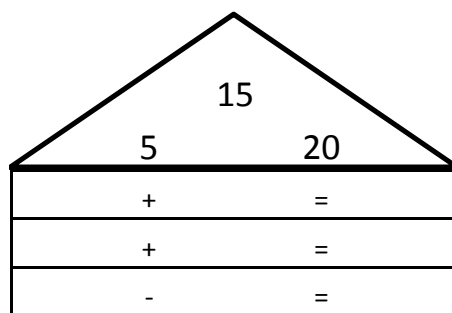
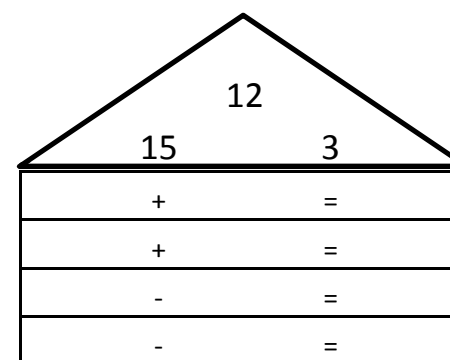
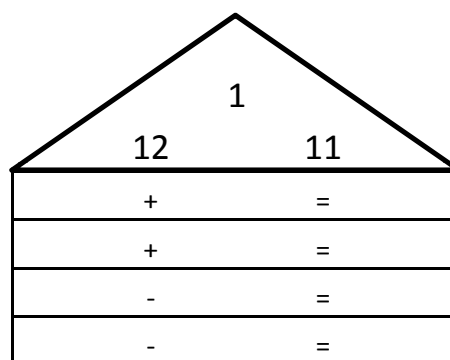
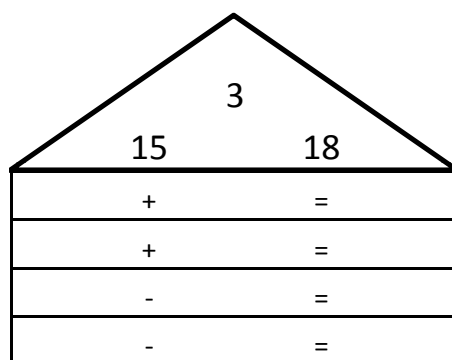
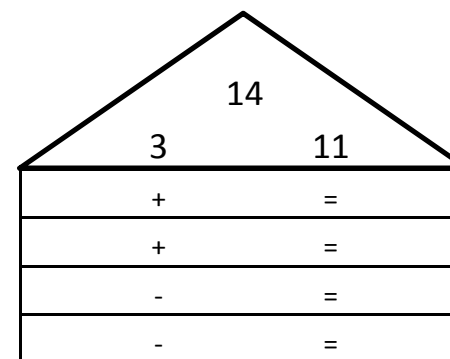
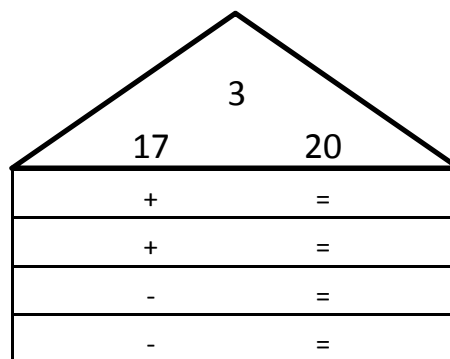
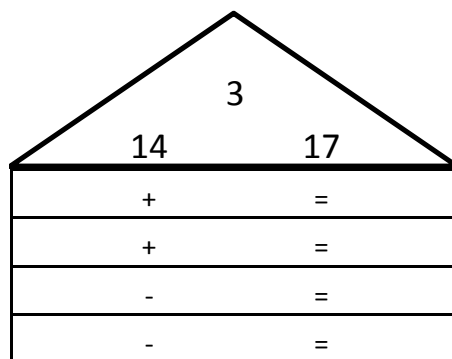


Z daných trojic čísel sestav příklady na sčítání a odčítání



$$\square - \square = \square$$

$$\square - \square = \square$$

$$\square - \square = \square$$

Z daných trojic čísel sestav příklady na sčítání a odčítání

2	
10	12
+	=
+	=
-	=
-	=

6	
16	10
+	=
+	=
-	=
-	=

10	
3	13
+	=
+	=
-	=
-	=

15	
5	10
+	=
+	=
-	=
-	=

17	
10	7
+	=
+	=
-	=
-	=

10	
14	4
+	=
+	=
-	=
-	=

11	
10	1
+	=
+	=
-	=
-	=

8	
18	10
+	=
+	=
-	=
-	=

9	
10	19
+	=
+	=
-	=
-	=

