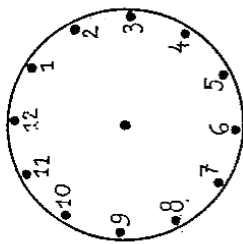
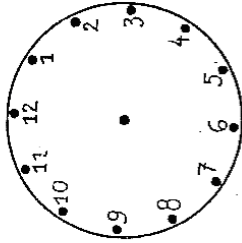


Vypočítej příklady. Výsledky zakresli na hodinách.

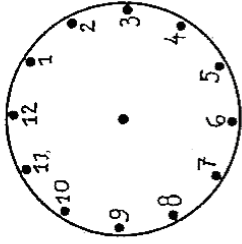
$$5 + 4$$



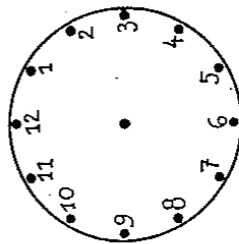
$$14 - 2$$



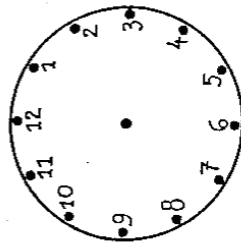
$$3 + 5$$



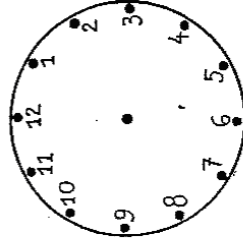
$$20 - 2$$



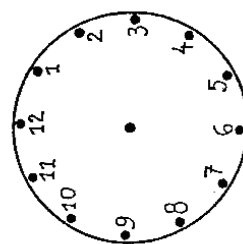
$$14 - 3$$



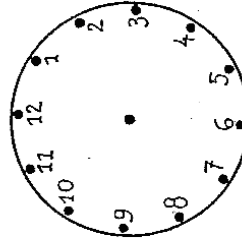
$$9 - 2$$



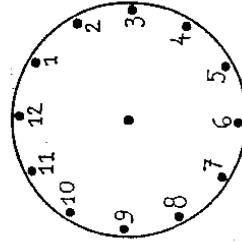
$$17 - 2$$



$$7 + 3$$

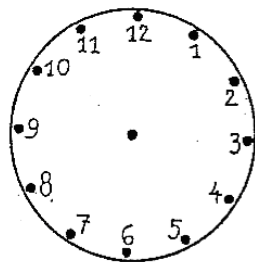


$$11 + 6$$

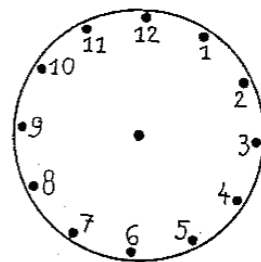


Vypočítej příklady. Výsledky zakresli na hodinách

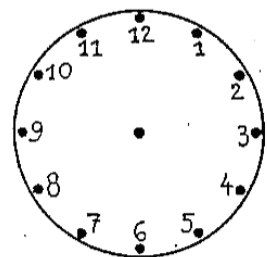
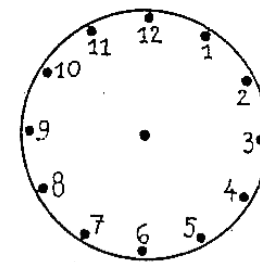
$13 + 2$



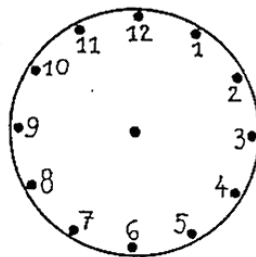
$1 + 10$



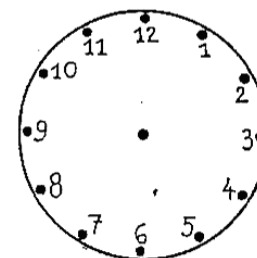
$4 + 3$



$16 - 10$

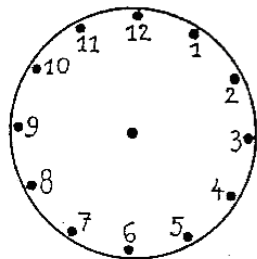


$3 + 6$

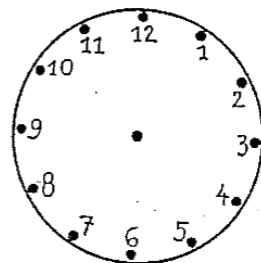


$10 - 2$

$15 - 5$



$20 - 8$



$3 + 11$

